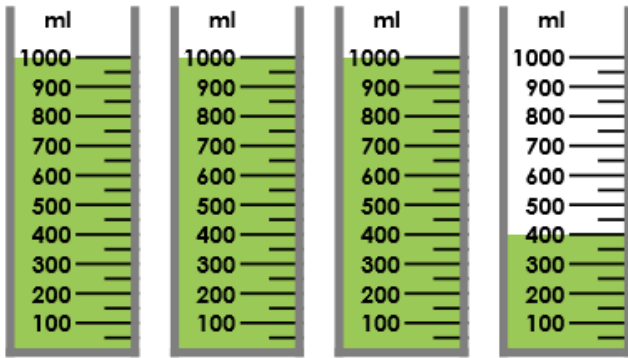


# Measure Capacity 2

# Measure Capacity 2

5a. Circle the capacity of the teapot.



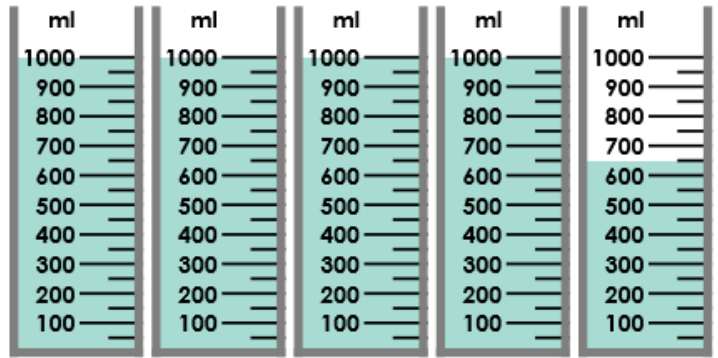
3L and 350ml

4L and 400ml

3L and 400ml

VF

5b. Circle the capacity of the teapot.



4L and 600ml


4L and 650ml

4L and 700ml

VF

6a. Colour the containers to show the given volume.


3L and 650ml



VF

6b. Colour the containers to show the given volume.

2L and 150ml




VF

7a. True or false?



I have 1L and 500ml of orange juice for my family's breakfast.




VF

7b. True or false?

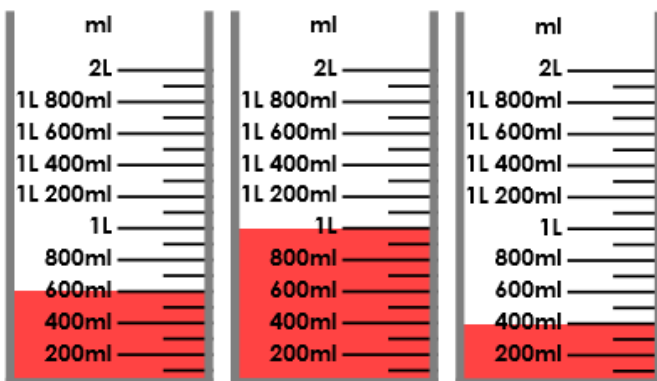


I have 1L and 800ml of syrup to bake some flapjacks.



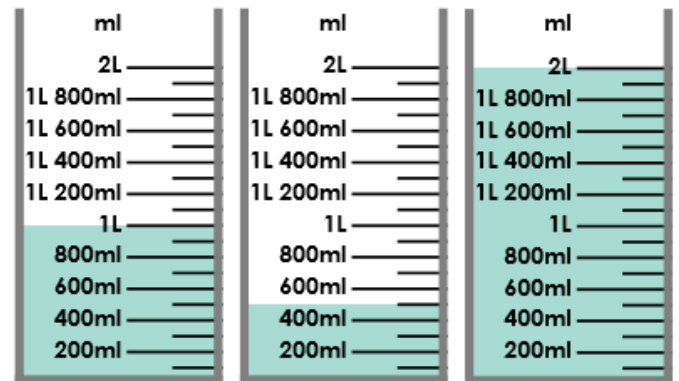
VF

8a. How much liquid is there in total?



VF

8b. How much liquid is there in total?



VF