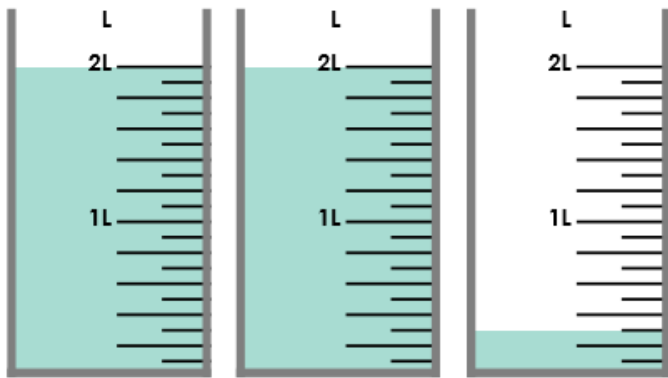


## Measure Capacity 2

## Measure Capacity 2

9a. Circle the capacity of the cups.



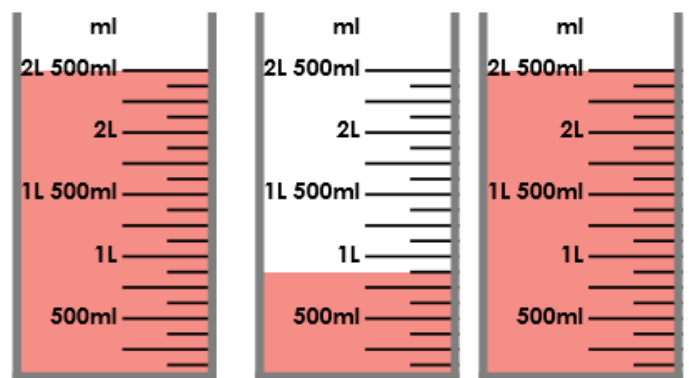
4L and 350ml

4L and 400ml

4L and 300ml

VF

9b. Circle the capacity of the teapot.



5L and 800ml

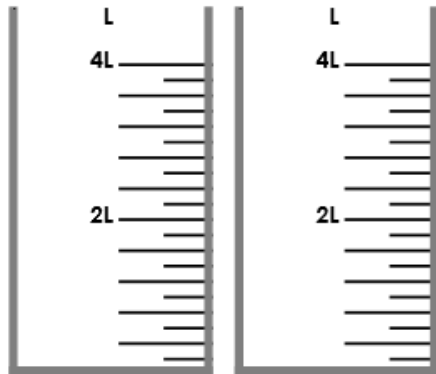
5L and 750ml

5L and 875ml

VF

10a. Colour the containers to show the given volume.

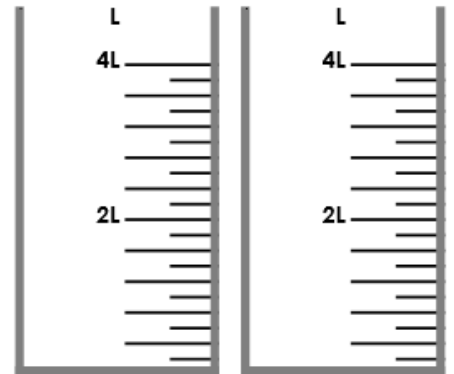
6L and 600ml



VF

10b. Colour the containers to show the given volume.

7L and 200ml

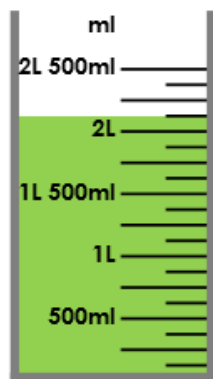


VF

11a. True or false?



I have 2L and 250ml of kale smoothie for my class's lunch time.

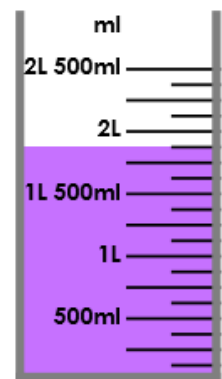


VF

11b. True or false?

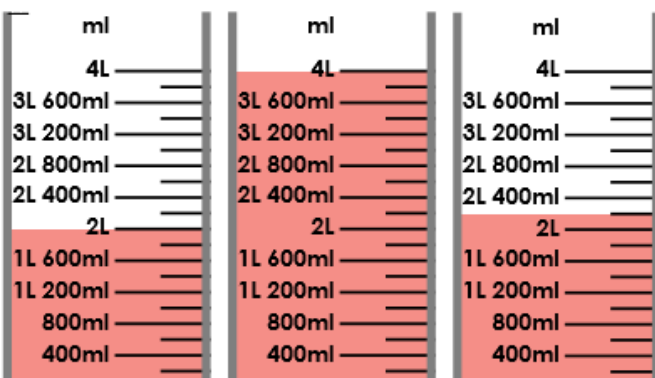


I have 1L and 750ml of blackcurrant squash for my class's play time.



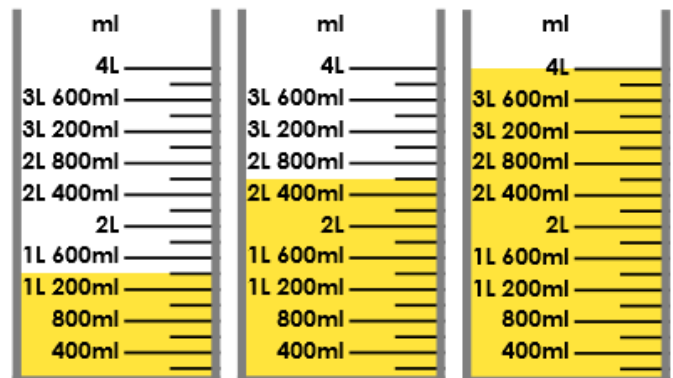
VF

12a. How much liquid is there in total?



VF

12b. How much liquid is there in total?



VF