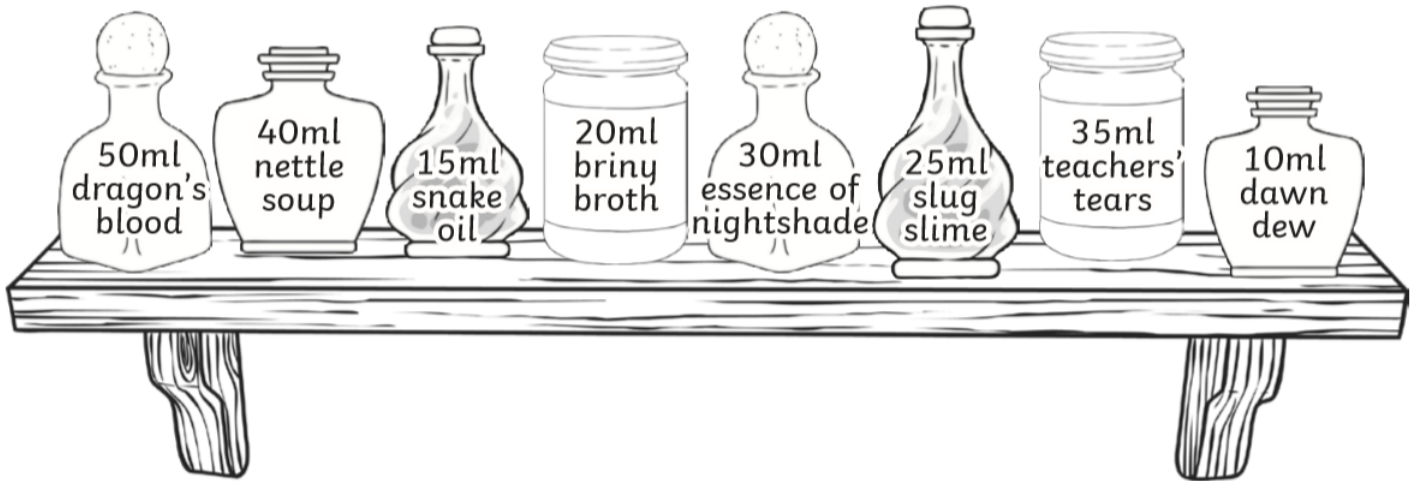


Potions Capacity



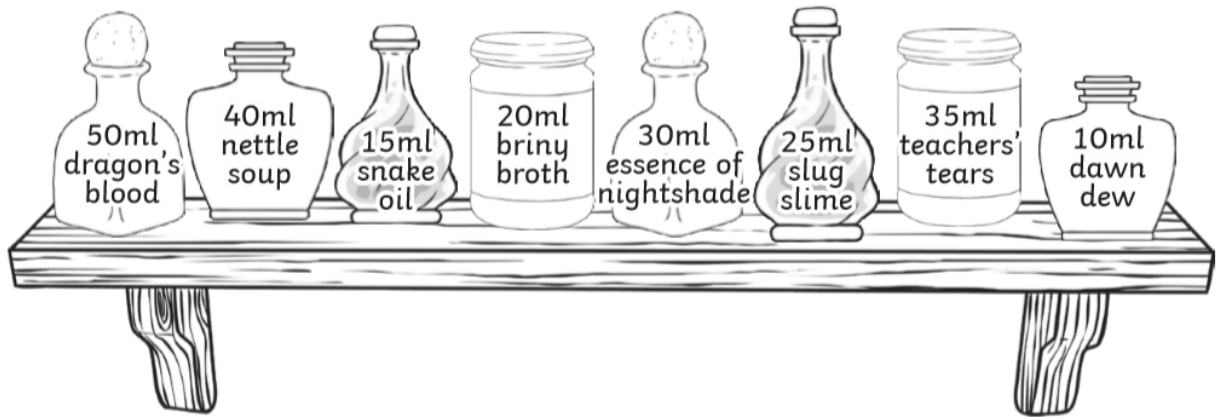
Wizard William and Witch Winifred are mixing potions. Can you help find all the possibilities for their recipes?

1. Wizard William can use any 3 ingredients. His potion needs to measure exactly 100ml. Which ingredients could he use?

2. Congratulations! What will Wizard William's potion do?

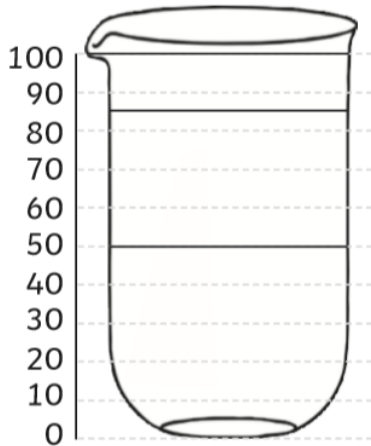
3. Witch Winifred has to use more than 3 ingredients. Her potion also needs to measure exactly 100ml. Which ingredients could she choose?

4. Congratulations! What will Witch Winifred's potion do?

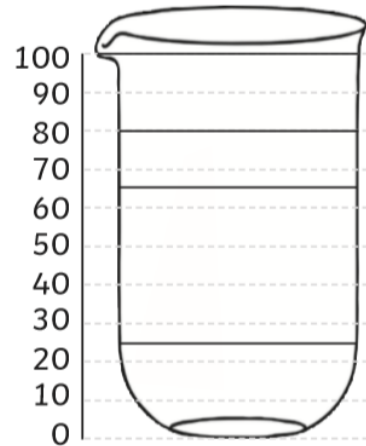


Apprentice Alf has mixed some potions, but he has forgotten to write down the recipes. Can you work out which ingredients are in each bottle by looking at the shelf above?

5.



6.



7. Can you also mix another potion for him and draw it in the last bottle?

