

Tenths as Decimals

Tenths as Decimals

1a. Match the fractions to the correct decimal.

$$\frac{2}{10}$$

0.6

$$\frac{6}{10}$$

0.8

$$\frac{8}{10}$$

0.2



VF

1b. Match the fractions to the correct decimal.

$$\frac{4}{10}$$

0.1

$$\frac{7}{10}$$

0.4


$$\frac{1}{10}$$

0.7



VF

2a. Use the image to complete the fraction and decimal.




$$\frac{5}{10}$$

0.____



VF

2b. Use the image to complete the fraction and decimal.



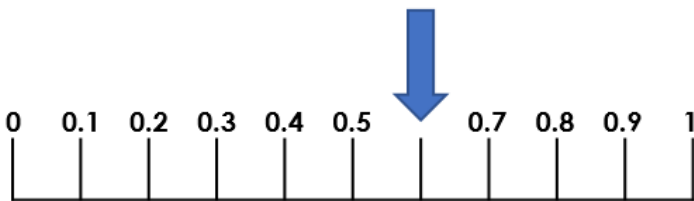
$$\frac{6}{10}$$

0.____



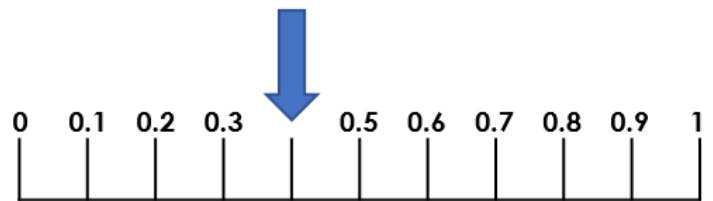
VF

3a. True or false? The arrow shows 0.6.



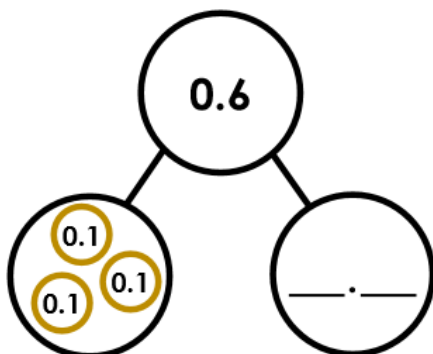
VF

3b. True or false? The arrow shows 0.3.



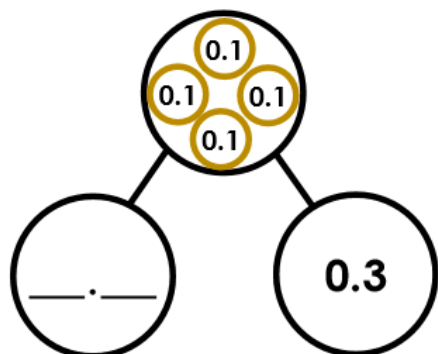
VF

4a. Complete the part whole model.



VF

4b. Complete the part whole model.



VF